

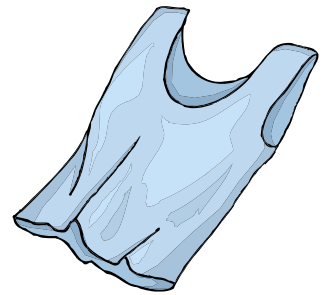

End-of-Unit Weather Questions

Scientist Name: _____

1. The temperature is 20° F.

Is this a hot, warm or cold day? _____

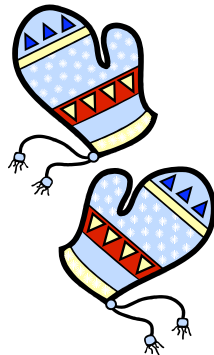
Circle the pieces of clothing that would be appropriate to wear outside if it 20° F.



2. The temperature is 86° F.

Is this a hot, warm or cold day? _____

Circle the pieces of clothing that would be appropriate to wear outside if it 86° F.



3. Pretend you are now in second grade and it is the month of February.

Will it be cold, warm or hot? _____

How do you know?

4. What happens to the temperature throughout the year?

5. How does the temperature change from day-to-day?
