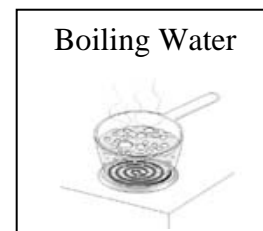

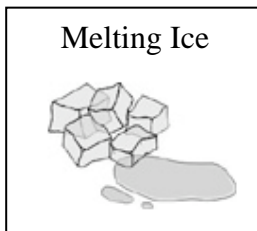
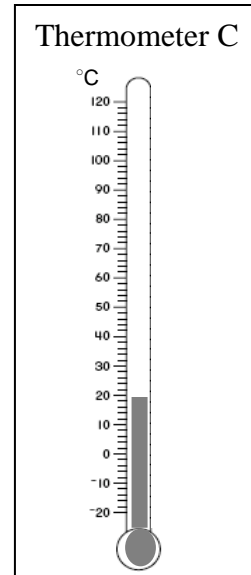

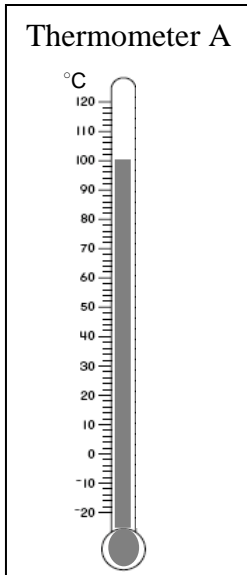


Name: _____

Date: _____

Assessment Task 1: Reading a Thermometer

1. Look at the three objects and thermometers. Decide which thermometer best represents the temperature of each object. Draw a line connecting the objects to the correct thermometer.



2. Explain why you think each thermometer represents the object you selected.

Thermometer A:

Thermometer B:

Thermometer C: